

Please circle the correct answer.

1. The largest continent is:
 - a. North America
 - b. Asia
 - c. Africa
 - d. South America

2. What is the official language of Slovenia?
 - a. Spanish
 - b. Slovene
 - c. Yemen
 - d. Japanese

3. Label by color the different parts of Asia
 - a. Northern Asia _____
 - b. Southern Asia _____
 - c. Eastern Asia _____
 - d. Southeast Asia _____
 - e. Central Asia _____
 - f. Middle East _____



4. The polar circle refers to the Arctic and Antarctic circles
 - a. True
 - b. False

5. A delta is a low, watery land formed at the mouth of a river
 - a. True
 - b. False

6. Match the following Asian countries with their capitals

China	Kabul
Afghanistan	Tbilisi
Cambodia	Beijing
Bahrain	Phnom Penh
Cyprus	Manama
Georgia	Nicosia

7. The highest mountain summit in the world is the Mount Everest, part of the Himalayas
 - a. True
 - b. False

Please circle the correct answer.

1. Where do you have to go to see the Great Wall?

- a. Japan
- b. China
- c. Georgia
- d. Russia

2. What types of world map is in the shape of a sphere?

- a. An amusement park map
- b. A city map
- c. A museum map
- d. A globe

3. In what continent is home to Russia?

- a. Europe
- b. Asia
- c. South America
- d. North American

4. The borders of Asia include the following, except:

- a. Ural Mountains
- b. Caucasus Mountains
- c. Caspian Sea
- d. Black Sea
- e. Atlantic Ocean
- f. Arctic Ocean
- g. Pacific Ocean
- h. Indian Oceans



5. The following facts are true, except

- a. Asia is the largest continent and covers 30% of earth's land
- b. Asia is the most populous continent in the world; 60% of the population of the world lives in Asia
- c. Only 3 countries together form Asia

6. Match the capital to its country

Armenia	Tokyo
Bangladesh	Yerevan
Indonesia	Naypyidaw
Japan	Dhaka
Burma (Myanmar)	Jakarta

7. The earth's zero of longitude, which by convention passes through Greenwich, England is called the Prime Meridian

- a. True
- b. False

Please circle the correct answer.

- Which one can have islands?
 - Oceans
 - Lakes
 - A and B
 - none of these
- What is the currency of China?
 - The Yuan
 - The Yang
 - The Mon
 - Rai Stones.
- Match these mountain ranges in Asia to the facts linked to them

Himalayas	Extend from Russia to Kazakhstan
Ural Mountains	separate Kyrgyzstan and China
Tien Shan	Run mostly through Nepal and Bhutan

- The following facts about the Tibetan plateau are true, except:
 - Usually considered the largest and highest area ever to exist in the history of Earth.
 - Known as the "Rooftop of the World,"
 - Tibet is part of the Australian continent
 - These glaciers in this plateau contain the largest volume of ice outside the poles.

5. Match the country with its capital

Azerbaijan	Thimphu
Bhutan	Amman
East Timor	Baku
Iran	Kuwait city
Jordan	Tehran
Kuwait	Dili

- Steppe landscape is a large area of flat, unforested grassland
 - True
 - False
- The capital of Australia is Canberra
 - True
 - False
- The Australian continent is in the Southern hemisphere
 - True
 - False
- Australia is bounded by the following except (Mark all that apply)
 - Pacific ocean
 - Atlantic Ocean
 - Caspian Sea
 - Southern Ocean
 - Indian Ocean
 - Afarura Sea

Please circle the correct answer.

1. What does a compass rose show?
 - a. Distance
 - b. Cardinal directions
 - c. The equator
 - d. longitude



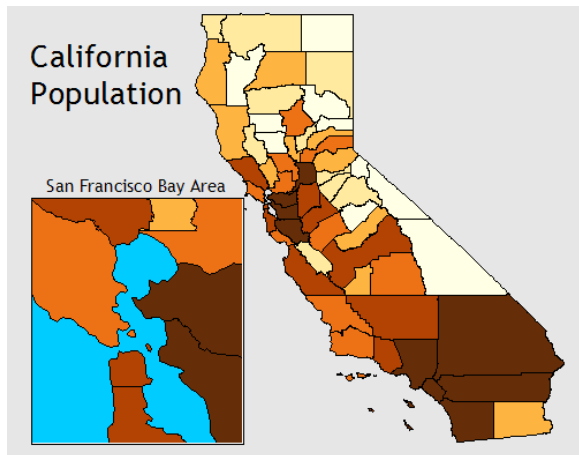
2. Which country is in Africa?
 - a. South Korea
 - b. Sudan
 - c. Germany
 - d. Tibet
3. Match the countries with their capital

Brunei	New Delhi
India	Vientiane
Kazakhstan	Ulaanbaatar
Laos	Bandar Seri Begawan
Malaysia	Astana
Mongolia	Kuala Lumpur



4. The Great Lakes are located between _____ and United States.
 - a. Switzerland
 - b. Mexico
 - c. Canada
 - d. India
5. The following facts of Rub' al Khali desert in Asia are true, except
 - a. It is considered the world's largest sand sea,
 - b. Covers an area larger than France across Saudi Arabia, Oman, the United Arab Emirates, and Yemen.
 - c. The desert is known as the Empty Quarter
 - d. A lot of tribes live in this desert
6. The closest neighbors to Australia are (check all that apply):
 - a. United States
 - b. New Zealand
 - c. Papa New Guinea

Please circle the correct answer.



1. What is a smaller map diagram within a larger map?
 - a. Key
 - b. Legend
 - c. Codes
 - d. Map inset

2. The Coastal Range runs from Canada to _____.
 - a. Texas
 - b. Hawaii
 - c. California
 - d. Louisiana

3. A person who makes maps?
 - a. Oceanographer
 - b. Map specialist
 - c. Cartographer
 - d. Meteorologist

4. Long Island is part of which state?
 - a. New Jersey
 - b. Connecticut
 - c. Maine
 - d. New York

5. Which state is the smallest in America?
 - a. Hawaii
 - b. Oregon
 - c. Wisconsin
 - d. Rhode Island



6. What is the division between northern and southern states known as?
 - a. Louisiana Purchase
 - b. Mason-Dixon Line
 - c. Amtrak
 - d. IH 10

7. Match the map to its definition

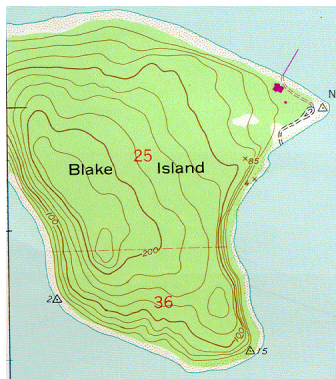
- | | |
|-----------------|---|
| Bathymetric map | map of the bottom of a body of water |
| Forestry map | map that shows weather conditions. |
| Geological map | map that represents elevations |
| Topographic map | map that notes the structure and composition of geologic features |
| Weather map | map that notes the density, kind, size, and value of the trees in an area |



Please circle the correct answer.



1. Chesapeake Bay is located in this state?
 - a. Delaware
 - b. Virginia
 - c. Maryland
 - d. Washington, D.C.



2. Which type of map has contour lines to show the elevation of an area?
 - a. Climate map
 - b. Physical map
 - c. Topographic map
 - d. Weather map
3. Which city would you visit to see Times Square and the Statue of Liberty?
 - a. Boston
 - b. Philadelphia
 - c. Miami
 - d. New York City

Match the state with its capital

- | | |
|---------------|----------------|
| Alabama | Sacramento |
| Florida | Indianapolis |
| California | Phoenix |
| Louisiana | Tallahassee |
| Arizona | Montgomery |
| Hawaii | Hartford |
| Indiana | Baton Rouge |
| Kansas | Annapolis |
| Connecticut | Honolulu |
| Maryland | Topeka |
| Mississippi | Cheyenne |
| Montana | Richmond |
| Nevada | Lansing |
| New Jersey | Jackson |
| Wyoming | Helena |
| Virginia | Nashville |
| Utah | Trenton |
| West Virginia | Charleston |
| Tennessee | Salt Lake city |
| Michigan | Carson City |





5th Grade – Australia Name _____ Teacher's Name _____



Fern Bluff RRISD PTA – Geography Superstars

5-7

Asian Continent: label at least 5 countries



For Educational Purposes Only



Match the country to its flag



Switzerland



Mexico



Canada



China



Italy



Norway



Australia



South Africa



Chile



France



New Zealand



Greece



Brazil



Germany





Please circle the correct answer.

1. Four of the first five Presidents were from what state?

- a. New York
- b. New Jersey
- c. Texas
- d. Virginia

2. Which state is known as the “Sunshine State”?

- a. Texas
- b. Minnesota
- c. Florida
- d. Washington

3. Which city is known as the “the City of Brotherly Love”?

- a. New York
- b. Philadelphia
- c. California
- d. Oregon

4. Which city is known as the “Big Apple”?

- a. Oklahoma city
- b. Madison
- c. San Francisco
- d. New York city

5. Which state is sometimes called the “Potato State”?

- a. Idaho
- b. Wisconsin
- c. New Potato
- d. Texas



6. The English Channel has a tunnel underneath for travelling.

- a. True
- b. False

7. Match the state with its capital

- | | |
|----------|-------------|
| Alaska | Denver |
| Arkansas | Dover |
| Colorado | Boise |
| Delaware | Juneau |
| Georgia | Little Rock |
| Idaho | Atlanta |
| Kentucky | Des Moines |
| Illinois | Augusta |
| Iowa | Frankfort |
| Maine | Springfield |



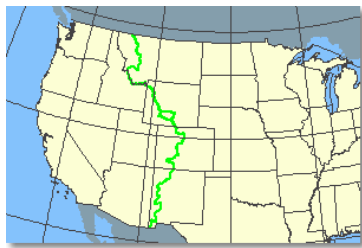
Please circle the correct answer.

1. The United States administers 16 territories as insular areas
 - a. True
 - b. False

2. The following are territories of United states except
 - a. Guam
 - b. American Samoa
 - c. Northern Marina islands
 - d. Hawaii
 - e. Puerto Rico
 - f. U.S. Virgin Islands

3. Which mountain range does the Continental Divide in North America run along?
 - a. Ozark Mountain
 - b. Alps
 - c. Appalachian Mountain
 - d. Rocky Mountain

4. Which state would most likely get hit by a hurricane?
 - a. Oklahoma
 - b. North Dakota
 - c. Kentucky
 - d. Florida



5. Name the longest cave in the world.
 - a. Lechuguilla Cave, NM
 - b. Altamira Cave, Spain
 - c. Mammoth Cave, KY

6. This 840-acre park that features an Egyptian obelisk, a skating rink, a zoo, and the Metropolitan Museum of Art.
 - a. Golden Gate Park
 - b. Central Park
 - c. Lincoln Park

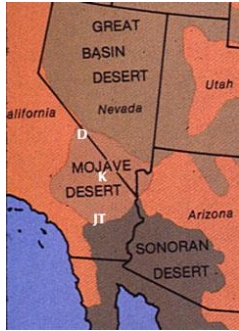
7. The highest mountain in the U.S:
 - a. Mount Hood, OR
 - b. Mount McKinley, Alaska
 - c. Pike's Peak, CO

8. The following statements are true, except
 - a. Butte is a flat-topped rock or hill formation with steep sides
 - b. A canyon is a deep valley with very steep sides - often carved from the Earth by a river.
 - c. A cape is a pointed piece of land that sticks out into a sea, ocean, lake, or river.
 - d. A bay is a body of water that is partly enclosed by land (and is usually smaller than a gulf).
 - e. A cartographer makes graphs





Please circle the correct answer.



1. Which state does not have the Mojave Desert?

- a. Arizona
- b. New Mexico
- c. California
- d. Nevada

2. The Bahama Islands is also referred to as the Caribbean Islands?

- a. True
- b. False

3. India is located _____ of China.

- a. West
- b. East

4. Russia is _____ of Australia.

- a. North
- b. South
- c. East
- d. West

5. The only Great Lake that lies entirely within the U.S. borders.

- a. Superior
- b. Michigan
- c. Erie

6. Which of the following statement is false?

- a. The height of an area, measured from sea level is called altitude
- b. Atlas is a book of maps and charts
- c. Polar circle or the arctic and antartic circle are imaginary circles around the north and south pole
- d. Canal is a natural waterway

7. Match the state with its capital

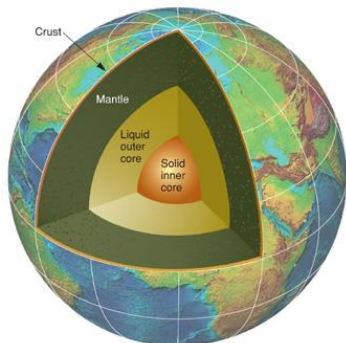
New Mexico	Oklahoma City
North Dakota	Santa Fe
Oklahoma	Columbia
Rhode Island	Austin
South Carolina	Bismarck
Texas	Montpelier
Vermont	Providence

8. Which geographical area receives the most average rainfall each year?

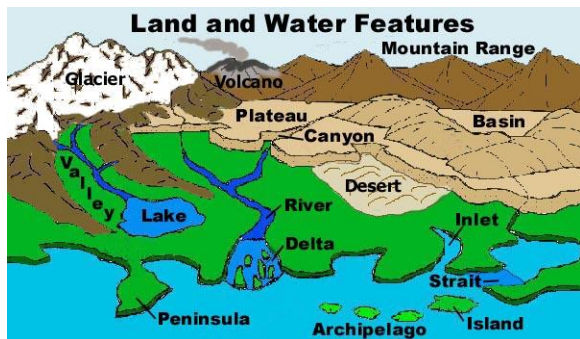
- a. Mt. Washington, New Hampshire
- b. Juneau, Alaska
- c. Seattle, Washington



Please circle the correct answer.



1. The center of earth is _____ .
 - a. Solid inner core
 - b. Liquid outer core
 - c. Crust
 - d. Mantle



2. What is archipelago?
 - a. A chain, cluster or collection of islands
 - b. Little green dots
 - c. Rocks
 - d. Canyon
3. What is inlet?
 - a. Peninsula
 - b. An island
 - c. Connection between a bay and the ocean
 - d. The eye of the ocean

4. Match the state with its capital

Massachusetts	Jefferson city
Minnesota	Lincoln
Missouri	Boston
Nebraska	Columbus
New Hampshire	Saint Paul
Ohio	Harrisburg
Pennsylvania	Concord

5. Geysers are natural hot spring that occasionally sprays water and steam above the ground

- a. True
- b. False

6. Across the world, most of the geysers are in (check all that apply):

- a. United States
- b. China
- c. Japan
- d. New Zealand
- e. South Africa

7. The state that is mostly a peninsula.

- a. Florida
- b. Hawaii
- c. Louisiana

8. The **state** that is made up of islands.

- a. Alaska
- b. Puerto Rico
- c. Hawaii



5th Grade – Australia Name _____ Teacher's Name _____

Fern Bluff RRISD PTA – Geography Superstars

5-14

Label 40 states on the map. Please use abbreviations for the state.

Example: Texas or TX





Please circle your answer

1. What six states comprise New England?
 - a. Maine, Pennsylvania, Vermont, Massachusetts, Connecticut, New York
 - b. Maine, New York, Vermont, Massachusetts, Connecticut, Delaware
 - c. Maine, New Hampshire, Vermont, Massachusetts, Connecticut, Rhode Island

2. Which of the following is false
 - a. The equator is an imaginary circle around the earth, halfway between the north and south poles
 - b. Prime Meridian is earth's line of zero degrees longitude
 - c. The International Date Line (IDL) is an imaginary north-south line (at the 180th meridian), in the Pacific Ocean, at which the date changes
 - d. Latitudes run in north to south direction

3. Two hundred million years ago most of the Earth's land was one huge continent named:
 - a. Panthalassa
 - b. Pandora
 - c. Pangaea

4. In Marco Polo's day, Cipango was the name for Japan, and Cathay was the name for:

- a. China
- b. Mongolia
- c. Turkey

5. Match the region to its definition

Tropics	wide, flat areas with grass and few trees
Prairie	Cold, treeless area
Tundra	freshwater wetland, spongy and muddy
Swamp	Warm, near the equator

6. Which of these is 277 miles long and one mile deep, and was formed by the erosion of the Colorado River.

- a. Royal Gorge
- b. Red Rock Canyon
- c. Grand Canyon

