

Please circle the correct answer.



1. What are the four directions on a map?
 - a. Compass, legend, scale, rose
 - b. North, South, East, West
 - c. Longitude, latitude, equator, compass
 - d. North Pole, South Pole, longitude, latitude

2. What ocean is on the eastern coast of the United States?
 - a. Indian Ocean
 - b. Arctic Ocean
 - c. Atlantic Ocean
 - d. Pacific Ocean

3. What two states in the United States do not border on any other states?
 - a. Alaska and Hawaii
 - b. Georgia and Illinois
 - c. North Dakota and South Dakota
 - d. Florida and Texas

4. What Ocean is on the western coast of the United States?
 - a. Indian Ocean
 - b. Arctic Ocean
 - c. Atlantic Ocean
 - d. Pacific Ocean

5. Which has bigger waves?
 - a. Rivers
 - b. Oceans
 - c. Lakes
 - d. Ponds

6. Where does lava come from?
 - a. Rivers
 - b. Prairies
 - c. Grassland
 - d. Volcanoes

7. Which is a desert?
 - a. The Rookies
 - b. Lake Tahoe
 - c. The Sahara
 - d. The Artic

Please circle the correct answer.

1. Forest is part of _____.
 - a. a backyard
 - b. nature
 - c. factories
 - d. houses

2. Which is bigger than a lake?
 - a. A Sea
 - b. A puddle
 - c. A creek
 - d. A pond



4. Which state is on the West coast of United States?
 - a. Utah
 - b. Michigan
 - c. Oregon
 - d. Texas

5. Which state is farthest north?
 - a. Nevada
 - b. Alaska
 - c. Florida
 - d. Arizona



3. _____ covers about two-thirds of the earth.
 - a. mountains
 - b. land
 - c. skyscrapers
 - d. water

6. Oceans are made out of _____.
 - a. lava
 - b. fresh water
 - c. fire
 - d. salt water





Please circle the correct answer.

1. Bridges are _____.
 - a. always made of metal
 - b. always natural
 - c. usually made by people
 - d. always made of wood

2. A _____ is a large flat area of land.
 - a. hill
 - b. plain
 - c. valley
 - d. mountain



6. Mount St. Helen is _____.
 - a. a sea
 - b. a volcano
 - c. a state
 - d. a religious figure

3. Which landform is a deep valley with steep sides?
 - a. Canyon
 - b. Mountain
 - c. Volcano
 - d. Plains

4. The coldest and iciest continent is _____.
 - a. Antarctic
 - b. Asia
 - c. Australia
 - d. South America



5. The Amazon Rainforest is in _____.
 - a. Africa
 - b. North America
 - c. South America
 - d. Georgia

7. Cape Cod is located in _____.
 - a. Florida
 - b. Louisiana
 - c. Massachusetts
 - d. Canada



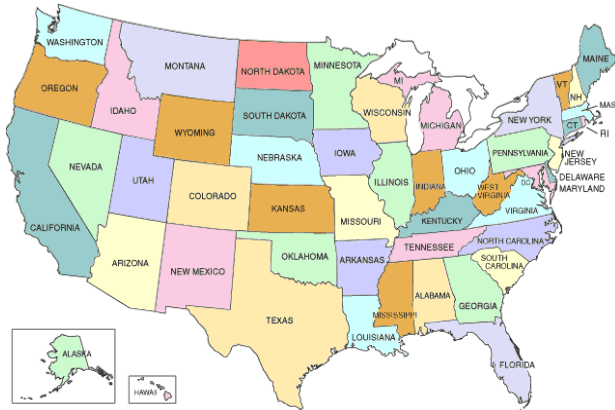
Please circle the correct answer.

1. What country has United States on its northern borders?
 - a. Canada
 - b. Botswana
 - c. France
 - d. Mexico

2. Atlas is a book of _____.
 - a. Poems
 - b. Maps
 - c. Stories
 - d. History



4. Florida is _____.
 - a. a desert
 - b. a mountain range
 - c. an island
 - d. a peninsula



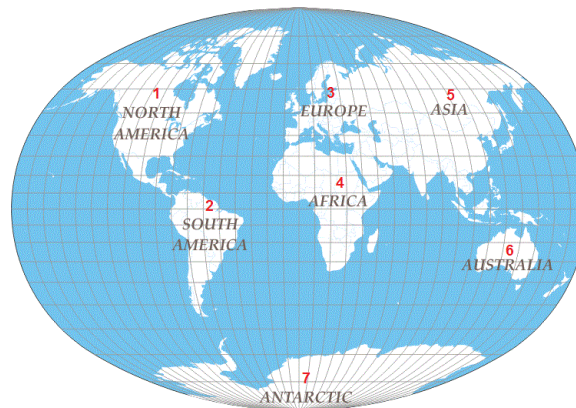
3. Which United States state is the farthest north?
 - a. Florida
 - b. North Dakota
 - c. Kansas
 - d. Hawaii



5. Which state has a border with New York?
 - a. Wyoming
 - b. Vermont
 - c. Nevada
 - d. Florida



Please circle the correct answer.



1. The state of Washington is located _____.
 - a. on the east coast
 - b. on the Atlantic ocean
 - c. on the west coast
 - d. in the south

2. What hemisphere is south of the Northern Hemisphere?
 - a. Eastern Hemisphere
 - b. Southern Hemisphere
 - c. Northwest Hemisphere
 - d. Western Hemisphere

3. Which ocean is closest to Florida?
 - a. Indian Ocean
 - b. Arctic Ocean
 - c. Atlantic Ocean
 - d. Pacific Ocean

4. What continent is north of South America?
 - a. Australia
 - b. Asia
 - c. North America
 - d. Africa

5. California is _____ of the United States.
 - a. North
 - b. on the east coast
 - c. south
 - d. on the west coast

6. The state of Massachusetts is located _____ of the United States?
 - a. in the middle
 - b. on the east coast
 - c. on the west coast
 - d. in the south

7. Washington D.C. is _____ Washington state?
 - a. different than
 - b. capital of
 - c. a city in
 - d. same as

Please circle the correct answer.

1. The continent of Antarctica has _____.

- a. a lot of palm trees
- b. elephants that roam free
- c. many hot days
- d. a lot of snow and ice

2. Which United State is made up of islands?

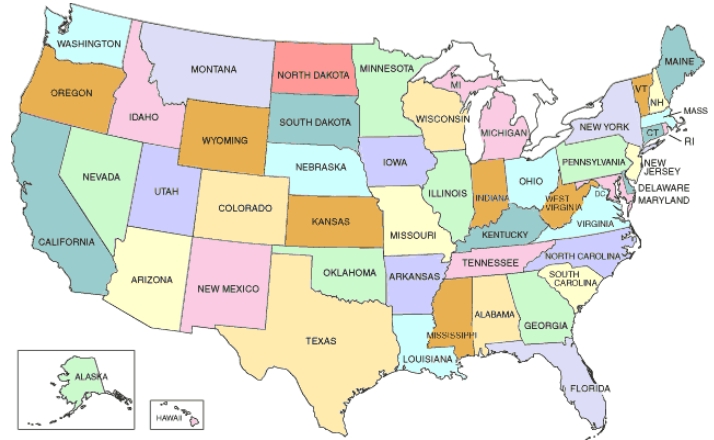
- a. Hawaii
- b. Nebraska
- c. Florida
- d. Texas

3. What is the biggest island in this group?

- a. Bali
- b. Australia
- c. Madagascar
- d. Hawaii

4. Where is South Carolina located?

- a. In Portugal
- b. In Canada
- c. In Mexico
- d. In United States



5. If you drove from Florida to Maine, what direction are you driving?

- a. South
- b. North
- c. East
- d. West



6. Where are the Rocky Mountains located?

- a. In Japan
- b. In United States
- c. In China
- d. In India

Please circle the correct answer.

1. Which state has a higher yearly snowfall?
 - a. Texas
 - b. Minnesota
 - c. Florida
 - d. Louisiana

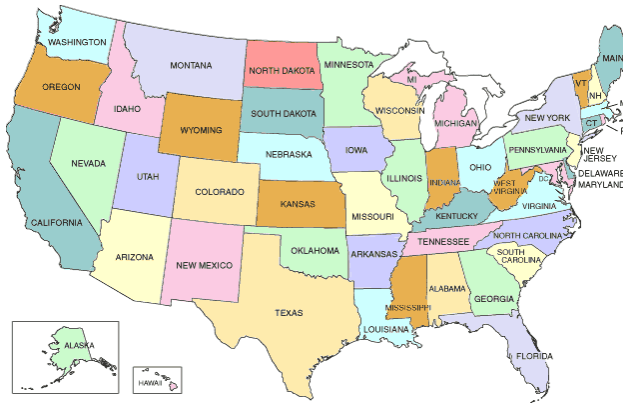
2. Which of these regions is a country?
 - a. Rome
 - b. Washington, D.C.
 - c. Paris
 - d. France

3. Which United States borders an ocean?
 - a. California
 - b. Tennessee
 - c. Kansas
 - d. Nevada

4. Where can you find icebergs?
 - a. Near tropical islands
 - b. Near equator
 - c. Near North and South Poles
 - d. None of these

5. Which state would you find in the southern part of United States?
 - a. Idaho
 - b. Wisconsin
 - c. Maryland
 - d. Louisiana

6. What are the Alps?
 - a. Rivers
 - b. Ice cream flavor
 - c. Ocean
 - d. Mountain range

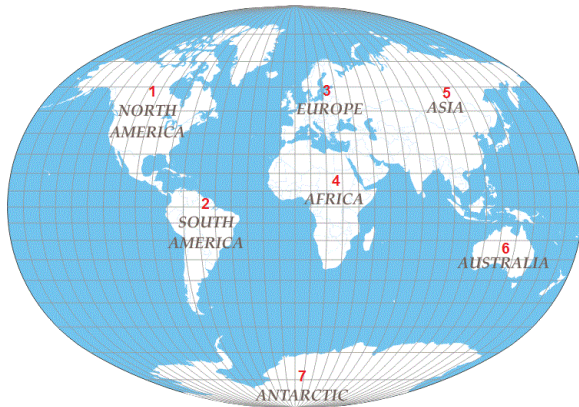


7. Which is closer to the Arctic Ocean?
 - a. Australia
 - b. Equator
 - c. North Pole
 - d. Africa

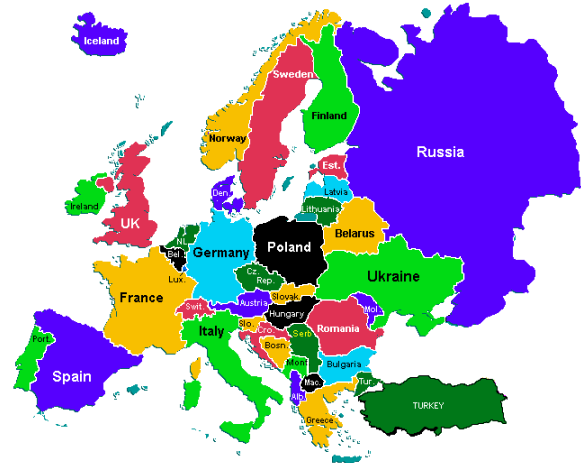


Please circle the correct answer.

- a. Tall land mass
- b. Deep ravine
- c. Large area of flat land
- d. A road



1. What continent has a northern border with South America?
- a. Europe
 - b. Antarctica
 - c. Australia
 - d. North America



4. Which country does not share a border with another country?
- a. Russia
 - b. Germany
 - c. Italy
 - d. Iceland



2. Which state borders the Gulf of Mexico?
- a. Kentucky
 - b. Maine
 - c. Wyoming
 - d. Florida

5. Where would you find rainforests?
- a. South America
 - b. Sahara Desert
 - c. North Pole
 - d. Antarctica

6. Which is the largest region in this group?
- a. City
 - b. Town
 - c. Country
 - d. Capital

7. A canyon is a _____.
- a. tall land mass
 - b. land surrounded by water
 - c. deep ravine
 - d. larger area of flat land

3. What is a mountain?



Please circle the correct answer.

1. Where would you be more likely to find a swamp?
 - a. Florida
 - b. California
 - c. Alaska
 - d. Texas




2. Washington, D.C. closer to _____ Ocean and Washington state is close to _____ ocean.

3. Arctic Ocean
4. Atlantic Ocean
5. Pacific Ocean
6. Indian Ocean

3. One country can contain _____.

- a. Mountains
- b. Beaches
- c. Forest
- d. All of the above



4. Lincoln Memorial is located in _____.

- a. Austin
- b. South Carolina
- c. New York
- d. Washington DC

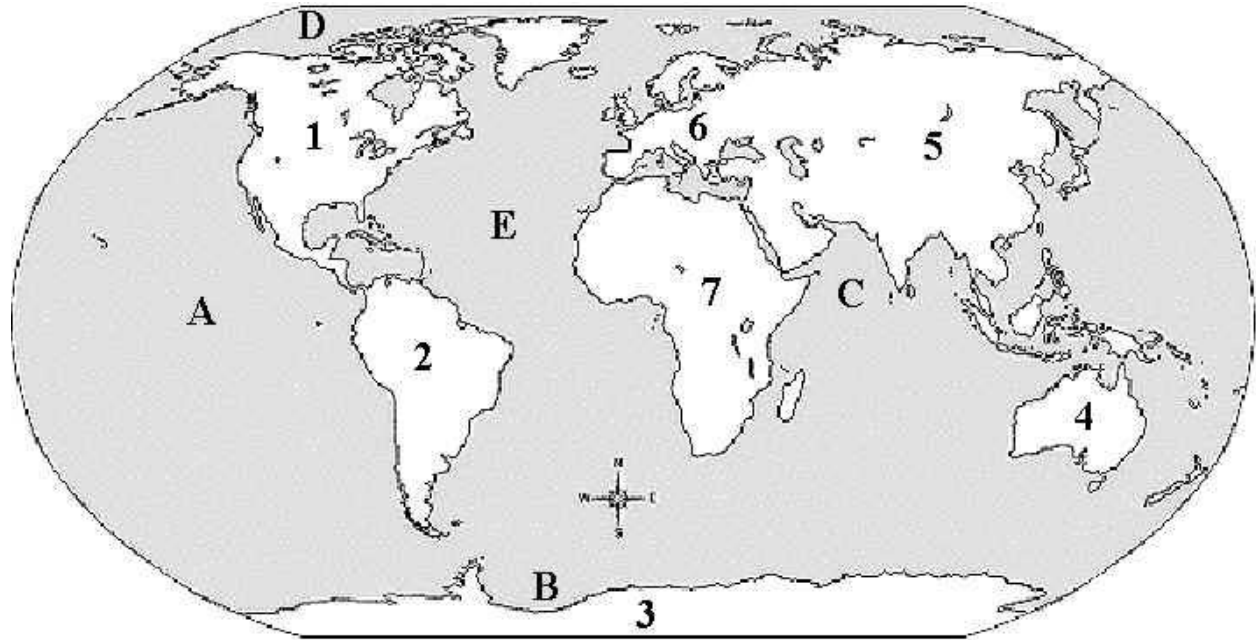


5. The Golden Gate Bridge is located in what state?

- a. California
- b. Arizona
- c. Utah
- d. Idaho

Match states with abbreviation of state.

- | | | |
|-------------------|-------|-------|
| 1. Texas | _____ | a. ME |
| 2. California | _____ | b. AZ |
| 3. Kentucky | _____ | c. WY |
| 4. Virginia | _____ | d. TX |
| 5. Wyoming | _____ | e. VA |
| 6. Oregon | _____ | f. SC |
| 7. Iowa | _____ | g. OR |
| 8. Ohio | _____ | h. NY |
| 9. South Carolina | _____ | i. IA |
| 10. Arizona | _____ | j. MT |
| 11. New York | _____ | k. OK |
| 12. Maine | _____ | l. OH |
| 13. Minnesota | _____ | m. KY |
| 14. Oklahoma | _____ | n. MN |
| 15. Montana | _____ | o. CA |



Label the map.

1. _____
2. _____
3. _____
4. _____
5. _____
6. _____
7. _____

Key words

- Africa
- Europe
- North America
- Asia
- South America
- Antarctica
- Australia

Please circle the correct answer.



1. Poland borders _____.
 - a. Spain
 - b. Africa
 - c. U.K.
 - d. Germany
2. Italy is shaped like a _____.
 - a. puppy
 - b. pig
 - c. boot
 - d. apple
3. Russia is next to _____.
 - a. France
 - b. Italy
 - c. Finland
 - e. Romania
4. The Baltic Sea is surrounded by _____.
 - a. Sweden
 - b. Lithuania
 - c. Finland
 - d. All of the above
5. The Black Sea is surrounded by _____.
 - a. France
 - b. Germany
 - c. Africa
 - d. Romania
6. Switzerland is neighbors to _____.
 - a. Spain
 - b. France
 - c. Africa
 - d. Iceland

Please circle the correct answer.



- The capital of China is _____.
 - Lijiang
 - Guilin
 - Hong Kong
 - Beijing
- A river running through China is _____.
 - Yangtze River
 - Danube River
 - Nile River
 - Mississippi River
- _____ borders China.
 - North Korea
 - Japan
 - Spain
 - Mongolia
- Beijing is _____ of Hong Kong.
 - north
 - south
 - east
 - west
- What is the official language of China?
 - English
 - Mandarin
 - French
 - Latin
- In China, each year is represented by _____.
 - a car
 - a fruit
 - an animal
 - a color

Please circle the correct answer.



1. What ocean is near India?
 - a. Pacific Ocean
 - b. Atlantic Ocean
 - c. Arctic Ocean
 - d. Indian Ocean
2. What is the capital of India?
 - a. New Delhi
 - b. Bangalore
 - c. Bhopal
 - d. Mumbai
3. What borders India?
 - a. China
 - b. Russia
 - c. Indonesia
 - d. Afghanistan
4. _____ is located in India.
 - a. The Taj Mahal
 - b. The Great Wall of China
 - c. Mount Rushmore
 - d. Golden Gate Bridge
5. What river flows through India?
 - a. Mississippi River
 - b. Ganges River
 - c. Danube River
 - d. Amazon River
6. What sea is to the west of India?
 - a. Indian Ocean
 - b. Arabian Sea
 - c. Bay of Bengal
 - d. Tiger Sea

Please circle the correct answer.



1. What is the capital of Texas?
 - a. Austin
 - b. South Padre Island
 - c. San Marcos
 - d. Houston
2. What is Texas State bird?
 - a. Red robin
 - b. Blue jay
 - c. Mockingbird
 - d. Crow
3. Dallas is to the _____ of Austin.
 - a. South
 - b. North
 - c. East
 - d. West
4. What is the state flower for Texas?
 - a. a rose
 - b. a tulip
 - c. a bluebonnet
 - d. a green bonnet
5. The Alamo is located in _____.
 - a. Houston
 - b. Austin
 - c. Dallas
 - d. San Antonio
6. The longest state river in Texas?
 - a. Rio Grande River
 - b. Guadalupe River
 - c. Barton Creek
 - d. Bee Cave Creek