

Please circle the correct answer.

1. Which state does not share a border with Texas?
 - a. Oklahoma
 - b. New Mexico
 - c. California
 - d. Louisiana
2. Which state is west of Kansas?
 - a. Iowa
 - b. Texas
 - c. Nebraska
 - d. Colorado
3. Which state is a peninsula?
 - a. Utah
 - b. Florida
 - c. Pennsylvania
 - d. Illinois
4. Which state is on the West Coast?
 - a. California
 - b. North Carolina
 - c. Texas
 - d. Florida
5. Which state is on the East Coast?
 - a. Texas
 - b. Montana
 - c. Oregon
 - d. New Jersey
6. Which state does not border Mexico?
 - a. California
 - b. Texas
 - c. Colorado
 - d. New Mexico




Please complete problems.



1. Color the state of Texas blue
2. Color the state of Alaska red
3. Color the state of California yellow
4. Color the state of Colorado green



5. Color the Texas state flag



Please circle the correct answer.

1. A "capital" is
 - a. a mountain
 - b. a river
 - c. a house
 - d. a city

2. What is San Antonio?
 - a. a continent
 - b. a state
 - c. a country
 - d. a city

3. When can a map help you?
 - a. When you need to study math
 - b. when you need sleep
 - c. when you need directions
 - d. when you need to do your chores

4. Cities are made by _____.
 - a. lakes
 - b. people
 - c. nature
 - d. mountain

5. What is the largest body of water?
 - a. a river
 - b. ocean
 - c. lake
 - d. pond



6. All the states in the United States

_____.

 - a. are islands
 - b. have volcanoes
 - c. are near the ocean
 - d. have capitals

7. People use wood from trees in forest to

_____.

 - a. find things
 - b. build things
 - c. farm crops
 - d. none of these

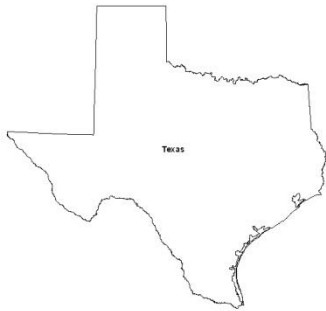


Please circle the correct answer.

1. The Great Lakes are _____ .
 - a. large islands
 - b. small lakes
 - c. large lakes
 - d. small rivers

5. Every state in the United States has at least 1 _____ .
 - a. a city
 - b. a mountain
 - c. a desert
 - d. a volcano

2. Highways are made by _____ .
 - a. nature
 - b. mountains
 - c. people
 - d. rivers



3. Where is Texas?
 - a. in Costa Rica
 - b. in France
 - c. in the United States
 - d. in Australia

6. Which state is farthest south?
 - a. New York
 - b. Missouri
 - c. South Dakota
 - d. Florida

4. What state in the United States is made up of lots of islands?
 - a. Hawaii
 - b. Montana
 - c. Nevada
 - d. Kentucky

7. What direction is opposite to east?
 - a. South
 - b. North
 - c. West
 - d. Southeast



Please circle the correct answer.

1. What could symbolize a forest on a map?
 - a. a sphere
 - b. a tree
 - c. a bucket
 - d. a wavy line

2. What color are oceans on maps?
 - a. Brown
 - b. Blue
 - c. Green
 - d. Orange

3. Which has the deepest water?
 - a. a river
 - b. a pond
 - c. an ocean
 - d. a lake




4. How many states are in the United States?
 - a. 62
 - b. 13
 - c. 50
 - d. 52

5. Which direction is opposite of south?
 - a. East
 - b. West
 - c. North
 - d. Southeast

6. What state is on the western coast of United States?
 - a. Kansas
 - b. New York
 - c. Texas
 - d. Oregon

7. A map key has _____ that stand for places on the map.
 - a. directions
 - b. symbols
 - c. borders

8. Write the 4 directions (North, South, East and West) for this compass rose



Please circle the correct answer.



1. What state would you visit to see the Statue of Liberty?
 - a. New York
 - b. New Mexico
 - c. Virginia
 - d. Iowa

4. What is the capital of Utah?
 - a. New Orleans
 - b. Lafayette
 - c. Salt Lake City
 - d. Baton Rouge



5. What is the capital of Colorado?
 - a. Baltimore
 - b. St. Louis
 - c. Cumberland
 - d. Denver

2. The Whitehouse in Washington, D.C. is where _____.
 - a. the mayor lives
 - b. the Pope lives
 - c. the President lives
 - d. the governor lives

6. What is the capital of California?
 - a. San Diego
 - b. Sacramento
 - c. Los Angeles
 - d. San Francisco

3. What is the capital of New Mexico?
 - a. Salt Lake City
 - b. Santa Fe
 - c. Belly Jelly
 - d. Montpelier

7. What is the capital of Nevada?
 - a. Carson City
 - b. Las Vegas
 - c. Houston
 - d. Dalton





States Word Search Puzzle

R R K C Y G P O B U R E S I I
E N I A M K R M G I E J A F C
D M O O M E C W A S O N X A B
E A M T G I T U S R N W L T Q
L I I O G W S E T A Y I A J C
A N N I R N N S I N F L H S I
W I N H O N I S I O E A A U V
A G E O E S I H R S W K J N H
R R S T T U G N S A S T H Q D
E I O Z O N I B I A L I X A P
H V T L V A X I O X W B P M D
A A A I N A V L Y S N N E P T
S T T E S U H C A S S A M L I
U K L U M I S S O U R I O T P
G C O N N E C T I C U T M S Y

CALIFORNIA
CONNECTICUT
DELAWARE
HAWAII
IOWA
KENTUCKY
LOUISIANA
MAINE
MARYLAND
MASSACHUSETTS
MINNESOTA
MISSISSIPPI
MISSOURI
OHIO
OREGON
PENNSYLVANIA
TENNESSEE
UTAH
VIRGINIA
WASHINGTON



Please circle the correct answer.

1. What can you find on mountaintops?

- a. Trees,
- b. Snow
- c. All of these
- d. Rocks

2. Which is a state?

- a. Arkansas
- b. Denver
- c. Austin
- d. Houston

3. Where can rivers flow?

- a. Into oceans
- b. Into other rivers
- c. Into lakes
- d. All of these



5. The Mississippi River flows through _____.

- a. many states
- b. just one state
- c. no state
- d. Canada



4. Which of these is a city in California?

- a. Miami
- b. New York
- c. Fresno
- d. New Mexico

6. What shape are globes?

- a. Rectangles
- b. Triangles
- c. Cubes
- d. Spheres

7. Which ocean contains salt water?

- a. Pacific Ocean
- b. Indian ocean
- c. Atlantic Ocean
- d. all of them

Please circle the correct answer.

1. Which of these is a United State?

- a. Louisiana
- b. Columbia
- c. Cloudy
- d. Fern Bluff

2. What are 'wetlands'?

- a. dry land
- b. deep lakes
- c. wet, soggy land
- d. large flat lands



3. South Carolina has a coast on the _____.

- a. Arctic Ocean
- b. Indian Ocean
- c. Pacific Ocean
- d. Atlantic Ocean



4. Which state borders with Canada?

- a. Montana
- b. Nebraska
- c. Texas
- d. Colorado

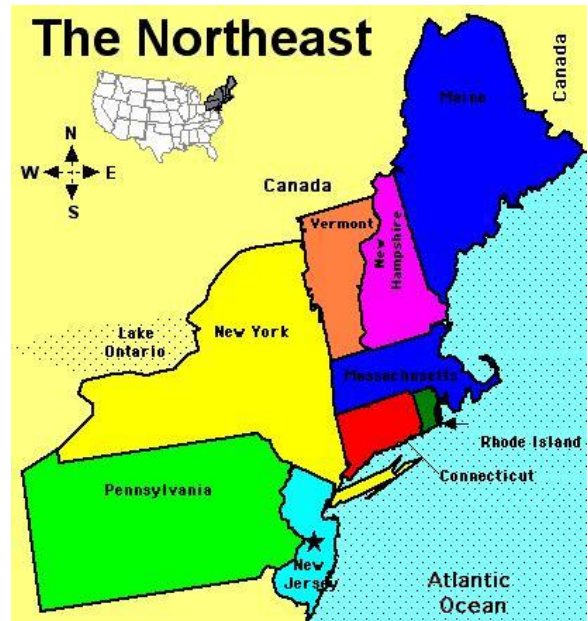
5. Which is a United State?

- a. Nepal
- b. New Mexico
- c. Germany
- d. Norway

6. Which one is a city?

- a. Austin
- b. Hawaii
- c. Ohio
- d. North Carolina

Please circle the correct answer.



1. Which US state borders Mexico?
 - a. West Virginia
 - b. Alaska
 - c. Utah
 - d. Arizona

4. Which state has a coast on the Atlantic Ocean?
 - a. New Jersey
 - b. Colorado
 - c. Nevada
 - d. California

2. How many state capitals are there in the United States?
 - a. 15
 - b. 25
 - c. 52
 - d. 50



3. Long distances in the United States are measured in _____.
 - a. miles
 - b. kilometers
 - c. meters
 - d. centimeters

5. A large, partially enclosed body of sea water is known as a _____.
 - a. man-made channel
 - b. lake
 - c. gulf
 - d. wetland



Please circle the correct answer.



- The Grand Canyon is located in what state _____ .
 - Texas
 - New York
 - Arizona
 - Utah



- Texas is in what time zone _____ .
 - Pacific
 - Central
 - Eastern
 - Mountain

- Where is Egypt?
 - North America
 - South America
 - Africa
 - Asia

- What state has its coast on the Pacific Ocean?
 - Arizona
 - California
 - Utah
 - New Mexico



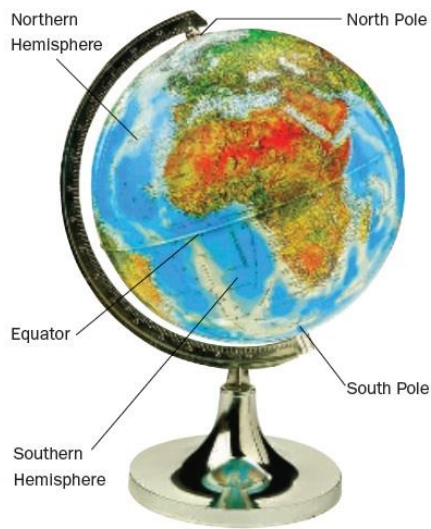
- Hawaii is in the _____ .
 - Arctic Ocean
 - Atlantic Ocean
 - Indian Ocean
 - Pacific Ocean

- What is a vast, open area of land covered in grass and shrubs?
 - Desert
 - Forest
 - Grassland
 - Rainforest

- What is the invisible line that divides two states?
 - Border
 - grassland
 - desert
 - plain

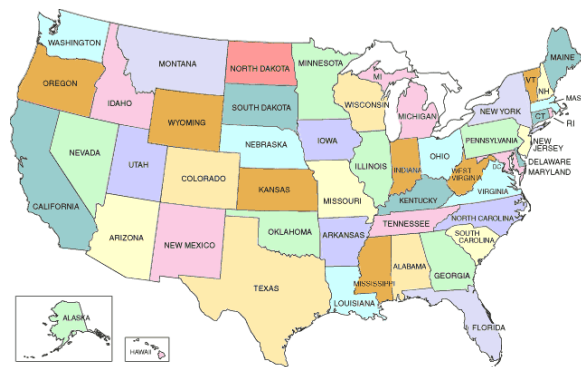


Please circle the correct answer.



1. On the globe, the equator is _____.
 - a. a mountain range
 - b. only partially marked
 - c. not marked anywhere
 - d. marked all the way around
2. You can have maps of _____.
 - a. amusement parks
 - b. neighborhoods
 - c. countries
 - d. all of these
3. Most lakes have _____.
 - a. fresh water
 - b. salt water
 - c. warm water
 - d. penguins
4. What is the opposite direction of southwest?
 - a. Southeast
 - b. Northeast
 - c. East
 - d. West

5. Who needs a road map?
 - a. a lost puppy
 - b. a truck driver
 - c. a ship's captain
 - d. a pilot



6. The state of South Carolina is located _____.
 - a. on the east coast
 - b. on the west coast
 - c. in central United States
 - d. up north
7. Where could you find what map symbols mean?
 - a. a rose
 - b. the equator
 - c. a compass
 - d. the legend





Please circle the correct answer.

1. A map could help you if you were lost in _____.
- a. a forest
 - b. a new city
 - c. a new country
 - d. all of these

5. What would be most helpful when driving?
- a. a climate map
 - b. a road map
 - c. a treasure map
 - d. a topographical map

2. Where would you find higher rainfalls?
- a. in a rainforest
 - b. in a desert
 - c. underwater
 - d. in the artic



6. Match the state with its capital

- | | |
|-----------|---------------|
| Texas | Oklahoma City |
| Oklahoma | Little Rock |
| Arkansas | Baton Rouge |
| Louisiana | Austin |

3. What country is north of the US?
- a. Canada
 - b. Italy
 - c. Mexico
 - d. Norway
4. What can you make a map of?
- a. your school
 - b. a castle
 - c. a museum
 - d. all of these

7. The weather in a desert is typically _____.
- a. hot and dry
 - b. wet
 - c. cool
 - d. icy



Please circle the correct answer.

1. A map scale shows _____.
 - a. where the shopping malls are located
 - b. how far things are from one another
 - c. how deep the ocean is
 - d. none of these



2. Which river is located in the United States?
 - a. Mississippi River
 - b. Amazon River
 - c. Han River
 - d. Ganges River
3. Which state is in the Midwest of the United States?
 - a. California
 - b. New Jersey
 - c. Georgia
 - d. Missouri

4. What is the abbreviation of Texas?
 - a. CA
 - b. TX
 - c. LA
 - d. OK



5. Which state does Lake Michigan border?
 - a. Virginia
 - b. New Mexico
 - c. Montana
 - d. Michigan



6. Italy is shaped like _____.
 - a. dog
 - b. boot
 - c. hand
 - d. bus





Write some of the things you've learned about Texas below:

