



1. Which of the following statement is false?
  - a. The height of an area, measured from sea level is called altitude
  - b. Atlas is a book of maps and charts
  - c. Polar circle or the arctic and antartic circle are imaginary circles around the north and south pole
  - d. Canal is a natural waterway



3. Which Midwest state is nicknamed the "Land of 10,000 Lakes"?
  - a. Oregon
  - b. Vermont
  - c. Minnesota
  - d. Arkansas



4. What is the capital of Hawaii?
  - a. Maui
  - b. Austin
  - c. Oahu
  - d. Honolulu

5. Match the state and its capital

Kansas	Boston
Missouri	Lansing
Massachusetts	Topeka
Florida	Jefferson City
Michigan	Tallahassee

2. What is Washington DC closer to?
  - a. Atlantic Ocean
  - b. Pacific Ocean
  - c. Indian Ocean
  - d. Arctic Ocean



Please circle the correct answer.

1. Which of the following are major rivers in the US? Check all that apply
  - a. Mississippi River
  - b. Colorado River
  - c. Rio Grande River
  - d. Colorado River
  - e. The Nile

2. Which of the following is not a continent?
  - a. Asia
  - b. Africa
  - c. Europe
  - d. South America
  - e. United States
  - f. Australia



3. What are the Alps?
  - a. Cookies
  - b. Mountain Ranges
  - c. Camels
  - d. Oceans



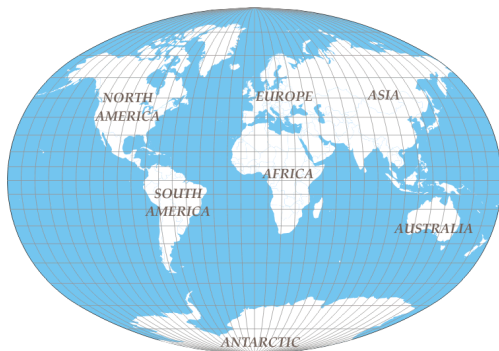
4. What provides shelter for barges, boats, and ships?
  - a. Canyon
  - b. Prairies
  - c. Desert
  - d. Harbor
5. Which of the following is not a province of Canada?
  - a. British Columbia
  - b. Quebec
  - c. Ontario
  - d. Alaska
  - e. Nova Scotia

6. Match the state and the capital

Alabama	Austin
Mississippi	Sacramento
California	St Paul
Texas	Jackson
Minnesota	Montgomery

1. Match the State with the capital

Alaska	Hartford
Colorado	Juneau
Connecticut	Albany
New York	Springfield
Illinois	Denver



2. How many continents are there?

- a. 8
- b. 5
- c. 7
- d. 20



3. Which state is in the Midwest of the US?

- a. Texas
- b. California
- c. New Jersey
- d. South Dakota



4. The United States has \_\_\_\_\_ time zones(s).

- a. different
- b. two
- c. only one
- d. three

5. The following are the major mountain ranges in the US, except \_\_\_\_\_

- a. Sierra Nevada
- b. Alps
- c. Cascades
- d. Rockies
- e. Appalachian

6. An archipelago is a group or chain of islands clustered together in a sea or ocean

- a. True
- b. False

1. Which of these states, on average, has a higher yearly snowfall?
  - a. Florida
  - b. Texas
  - c. Louisiana
  - d. Minnesota
  
2. Which of these states, on average, has the warmest temperature?
  - a. Texas
  - b. Minnesota
  - c. Maine
  - d. Oregon
  
3. What is the capital of Canada?
  - a. Berlin
  - b. Ottawa
  - c. Paris
  - d. Seattle
  
4. Match the Canadian provinces with their capital
 

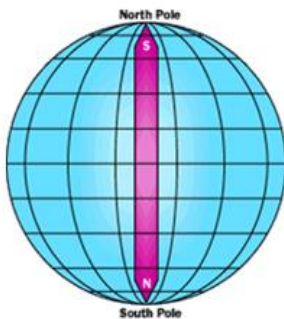
British Columbia	Quebec City
Quebec	Toronto
Nova Scotia	Victoria
Ontario	Edmonton
Alberta	Halifax
  
5. The Great Lakes of North America include the following, except \_\_\_\_\_
  - a. Lake Superior
  - b. Lake Michigan
  - c. Lake Erie
  - d. Lake Champlain
  - e. Lake Huron
  - f. Lake Ontario
  
6. The list of North American deserts include the following, except
  - a. Mojave
  - b. Sonoran
  - c. Chihuahua
  - d. Sahara
  
7. In the US, parts of the following states are deserts, except
  - a. California
  - b. Texas
  - c. Arizona
  - d. New Mexico
  - e. Nevada
  - f. Arkansas
  
8. The following statements are true, except
  - a. Butte is a flat-topped rock or hill formation with steep sides
  - b. A canyon is a deep valley with very steep sides - often carved from the Earth by a river.
  - c. A cape is a pointed piece of land that sticks out into a sea, ocean, lake, or river.
  - d. A bay is a body of water that is partly enclosed by land (and is usually smaller than a gulf).
  - e. A cartographer makes graphs



Please circle the correct answer.



1. The Great Salt Lake is \_\_\_\_\_.
  - a. filled with fresh water
  - b. a tiny pond
  - c. only full when it rains
  - d. filled with salt water



2. The South Pole is one pole. What is the other pole?
  - a. The West Pole
  - b. The East Pole
  - c. The Arctic Pole
  - d. North Pole

### 3. Match with their location

Mediterranean Sea	Mexico
Natural arches	Africa
The Sahara desert	Between Europe and Africa
Monarch butterfly reserves	United States



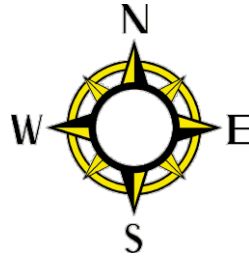
4. A peninsula is surrounded by water \_\_\_\_\_.
  - a. on all sides
  - b. none of these
  - c. on 2 sides
  - d. on 3 sides

### 5. Match the state with its capital

Arizona	Dover
Arkansas	Boise
Delaware	Atlanta
Georgia	Phoenix
Idaho	Little Rock



Please circle the correct answer.



1. Which is the biggest state in this group?
  - a. Vermont
  - b. Maine
  - c. Alaska
  - d. Iowa
2. How would you abbreviate Texas?
  - a. CT
  - b. TZ
  - c. TX
  - d. TN
3. South Dakota is located \_\_\_\_\_ in United States.
  - a. east
  - b. west
  - c. south
  - d. north
4. Colorado is \_\_\_\_\_ of Kansas.
  - a. west
  - b. east
  - c. north
  - d. south
5. Washington is next to which state?
  - a. Idaho
  - b. Florida
  - c. Colorado
  - d. Kentucky
6. Alabama is \_\_\_\_\_ of Ohio.
  - a. west
  - b. east
  - c. south
  - d. north
7. All the following statements are true, except
  - a. A cliff is a steep face of a mountain of rock and soil.
  - b. A compass is a device that always points north and is used for navigation.
  - c. A compass rose is a design on a map that shows direction.
  - d. Fjord is a type of mountain

d. Thailand

1. The following countries border Mexico?

(Check all that apply)

- a. United States
- b. Canada
- c. Belize
- d. Cost Rica
- e. Guatemala

5. What country has tropical rainforest?

- a. Brazil
- b. Sweden
- c. Germany
- d. Iran

2. Where is the weather the warmest on an average?

- a. Near the North Pole
- b. On the equator
- c. In the Arctic Ocean
- d. Near the South Pole



3. Who would need an ocean map?

- a. Ship's captain
- b. Pilot
- c. Train conductor
- d. Climber

6. What might you find at the bottom of a canyon?

- a. A mountain
- b. An ocean
- c. A river
- d. A hill



7. The capital of Mexico is:

- a. San Jose
- b. Mexico City
- c. Puerto Vallarta
- d. Cancun

8. Match the state with the capital

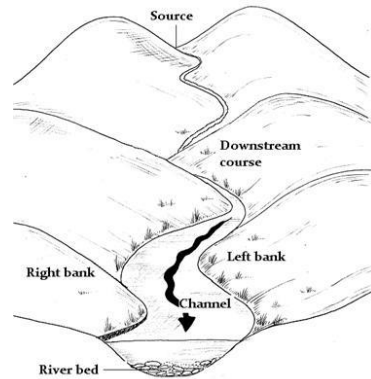
Indiana	Oklahoma City
Kentucky	Olympia
Oklahoma	Frankfort
North Carolina	Indianapolis
Washington	Raleigh

4. In which country would you find kangaroos and the city of Sydney?

- a. South Africa
- b. Australia
- c. Iceland

1. Match the countries of Central America with their capital

Belize	San Jose
Honduras	Panama City
Costa Rica	Belmopan
Nicaragua	Guatemala city
El Salvador	Tegucigalpa
Guatemala	San Salvador
Panama	Managua



2. Central America is a tapering isthmus of North American continent connecting to South America

- a. True
- b. False

3. The continent of North America does not include:

- a. United States
- b. Canada
- c. Mexico
- d. Argentina

5. What is the beginning of the river called?

- a. Channel
- b. Source
- c. River bed
- d. Right bank

6. Mount St. Helen is located in \_\_\_\_\_.

- a. Mexico
- b. Florida
- c. Washington
- d. Wisconsin

7. Match the state with its capital

Wyoming	Charleston
West Virginia	Cheyenne
South Carolina	Montpelier
Oregon	Columbia
Vermont	Salem



4. Which one describes Lake Superior?

- a. Located in Greenland
- b. Has a volcano in the middle
- c. Largest freshwater lake in the world
- d. A very small lake



Please circle the correct answer



1. Where is the Mojave Desert located?
  - a. California
  - b. Nevada
  - c. Arizona
  - d. All of the above



2. Mount Rushmore is located in what state?
  - a. Texas
  - b. Colorado
  - c. South Dakota
  - d. North Dakota
3. Volcano is a mountain or hill having a crater or vent through which lava, rock fragments, hot vapor, and gas are being or have been erupted from the earth's crust.
  - a. True
  - b. False

4. Volcanos in the United States: Match the volcano to its location

Kilauea	Oregon
Mount Rainier	Hawaii
Mount Hood	Washington
Mount Shasta	Alaska
Redoubt	Utah
Crater Lake	California

5. What Presidents are on Mount Rushmore?

- a. President Jefferson
- b. President Lincoln
- c. President Washington
- d. President Roosevelt
- e. All of the above

6. Who built Mount Rushmore?

- a. Gutzon Borglum
- b. Louie Vuitton
- c. Jennifer Lopez
- d. Michelangelo

7. Which of the following statement is false

- a. A forestry map is a map of the bottom of a body of water, noting the depth contours
- b. A geyser is a natural hot spring that occasionally sprays water and steam above the ground
- c. A glacier is a slowly moving river of ice
- d. An island is a piece of land away from water



Please circle the correct answer.

1. Someone who makes maps is a \_\_\_\_\_.

a. Meteorologist  
b. Geologist  
c. Cartographer  
d. Photographer

2. Which of these is an island?

a. California  
b. Russia  
c. Australia  
d. China



3. The Mediterranean Sea is next to \_\_\_\_\_.

a. Italy  
b. Mexico  
c. United States  
d. Australia

4. Match the State to its capital

Montana	Baton Rouge
Iowa	Helena
Louisiana	Des Moines
Maine	Annapolis
Maryland	Augusta

5. The continent of South America includes the following countries except:

a. Argentina  
b. Chile  
c. Peru  
d. Mexico  
e. Bolivia  
f. Paraguay

6. The largest river in the world is:

a. The Mississippi  
b. The Nile  
c. The Amazon

7. The highest waterfall in the world is:

a. Niagara falls, USA  
b. Angel falls, Venezuela  
c. La Fortuna waterfall, Costa Rica

8. The longest mountain range in the world is:

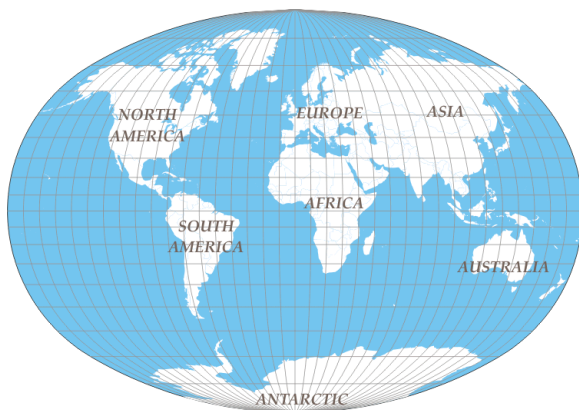
a. The Andes, South America  
b. The Rockies, North America  
c. The Himalayas, Asia

9. The capital of Chile is Santiago

a. True  
b. False

Please circle the correct answer.

1. Which one is a type of storm?
  - a. A hurricane
  - b. A river
  - c. A mountain
  - d. A volcano
2. What might be hard to find on a tropical island?
  - a. Pineapples
  - b. Palm trees
  - c. Penguins
  - d. Toucans
3. Which are made by humans?
  - a. Mountains
  - b. Rivers
  - c. Deserts
  - d. Canals



4. What continent is directly north of South America?
  - a. Australia
  - b. Asia
  - c. Antarctic
  - d. North America

**5. All the following statements are true except**

- a. A gulf is a part of the ocean/sea that is partly surrounded by land.
- b. GPS is short for global positioning system. GPS devices tell you your exact longitude and latitude.
- c. The geography term ice shelf is a thick slab of ice in the refrigerator
- d. The key of a map explains the symbols that are used on the map

**6. Match the state with its capital**

Nebraska	Trenton
New Jersey	Harrisburg
Ohio	Carson City
Pennsylvania	Providence
Rhode Island	Columbus

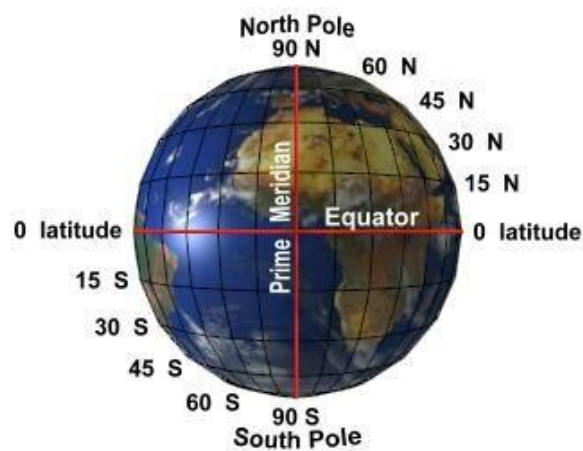
**7. Match the following South American countries with their capitals**

Argentina	Bogota
Brazil	Buenos Aires
Columbia	Quito
Ecuador	Lima
Peru	Brasilia

8. The Galápagos Islands are an archipelago of volcanic islands on either side of the Equator in the Pacific Ocean, and is part of Ecuador
  - a. True
  - b. False

Please circle the correct answer.

1. What is a dividing line between two areas?
  - a. A border
  - b. A capital
  - c. A globe
  - d. A map



1. Which of the following is false
  - a. The equator is an imaginary circle around the earth, halfway between the north and south poles
  - b. Prime Meridian is earth's line of zero degrees longitude
  - c. The International Date Line (IDL) is an imaginary north-south line (at the 180th meridian), in the Pacific Ocean, at which the date changes
  - d. Latitudes run in north to south direction
2. The driest place on earth is Atacama desert which is in South America
  - a. True
  - b. False

3. The largest rainforest in the world is the Amazon
  - a. True
  - b. False

4. Match the state with the capital

North Dakota	Concord
New Hampshire	Salt Lake City
Tennessee	Bismarck
Utah	Richmond
Virginia	Nashville

5. An insular area is a United States territory that is neither a part of one of the fifty states nor a part of the District of Columbia (Washington DC), the nation's federal district.
  - a. True
  - b. False
6. The following are insular areas of the US, except
  - a. American Samoa
  - b. Guam
  - c. Puerto Rico
  - d. North Mariana islands
  - e. US Virgin island
  - f. Galapagos islands



Please circle the correct answer

1. If you sail from Australia to South America, what direction would you be sailing?
  - a. North
  - b. West
  - c. South
  - d. East



2. How many Oceans are there?
  - a. Five
  - b. Four
  - c. Seven
  - d. Fourteen
3. Which Ocean is the largest?
  - a. Atlantic Ocean
  - b. Indian Ocean
  - c. Arctic Ocean
  - d. Pacific Ocean
4. If you sail from North America to Europe, what direction would you be sailing?
  - a. North
  - b. West
  - c. South
  - d. East

5. Match the state to its capital

New Mexico	Pierre
South Dakota	Madison
Wisconsin	Santa Fe

6. Match the region to its definition

Tropics	wide, flat areas with grass and few trees
Prairie	Cold, treeless area
Tundra	freshwater wetland, spongy and muddy
Swamp	Warm, near the equator

7. Reef is the undersea growth of coral near the surface of water
  - a. True
  - b. False
8. The following statements about the types of maps are true, except:
  - a. Bathymetric map is a map of the bottom of a body of water
  - b. A geologic map shows location of very large mountains
  - c. A physical map is a map that shows an area's natural physical features, like mountains, lakes, and rivers
  - d. A topographic map is a map that represents elevations.
  - e. A weather map is a map that shows weather conditions for a time period



3<sup>rd</sup> Grade – Asia Name \_\_\_\_\_ Teacher's Name \_\_\_\_\_



Fern Bluff RRISD PTA – Geography Superstars

3-14

Label any 25 states on the map. You can use the state's abbreviation. E.g. TX for Texas



For Educational Purposes Only





3<sup>rd</sup> Grade – Asia Name \_\_\_\_\_ Teacher's Name \_\_\_\_\_



Fern Bluff RRISD PTA – Geography Superstars

3-14

Label at least 4 provinces of Canada



For Educational Purposes Only



Label 5 South American Countries



Label 5 countries in Central America

